



COMPARACIÓN DE FRACCIONES


(Fracciones con el mismo denominador)




$\frac{2}{5}$



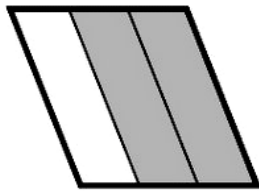
$\frac{4}{5}$



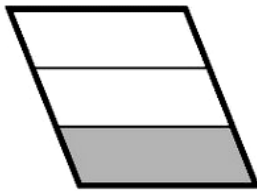
$\frac{1}{7}$



$\frac{5}{7}$



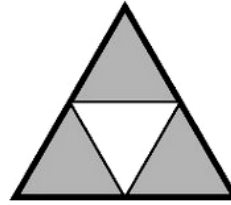
$\frac{2}{3}$



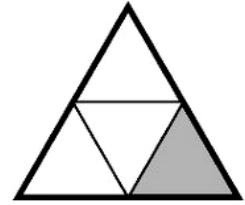
$\frac{1}{3}$



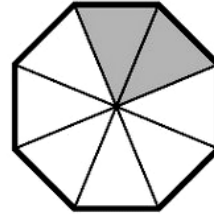
Escribe el símbolo $<$, $>$ según corresponda



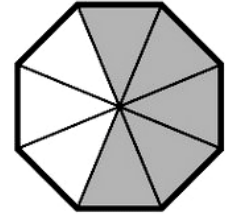
$\frac{3}{4}$



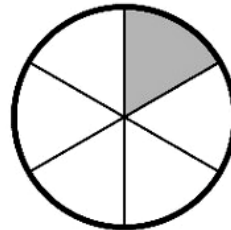
$\frac{1}{4}$



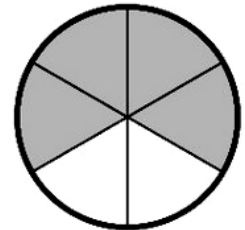
$\frac{2}{8}$




$\frac{5}{8}$




$\frac{1}{6}$




$\frac{4}{6}$



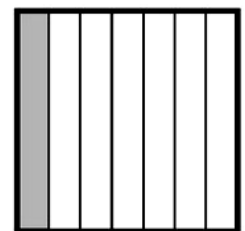
$\frac{2}{5}$



$\frac{4}{5}$



$\frac{4}{7}$



$\frac{1}{7}$