

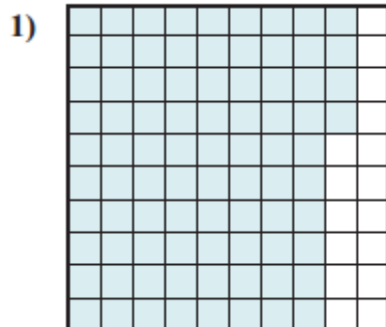
nombre _____

curso _____

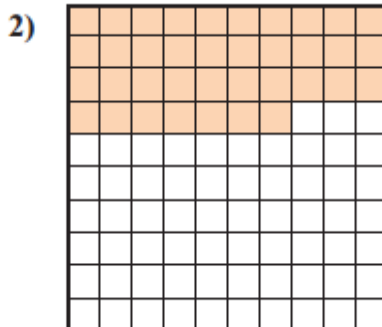
fecha _____

PAUTA ACTIVIDADES: DETERMINAR DÉCIMOS Y CENTÉSIMOS

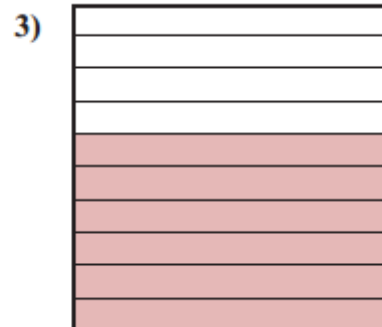
Encierre en un círculo o marque con rojo, el decimal que corresponde a cada imagen:



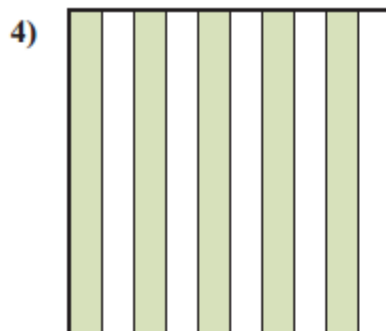
- A. 0,84
 B. 0,0084
 C. 0,084
 D. 84,00



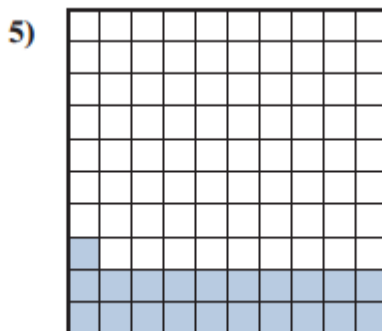
- A. 0,037
 B. 0,37
 C. 0,0037
 D. 37,00



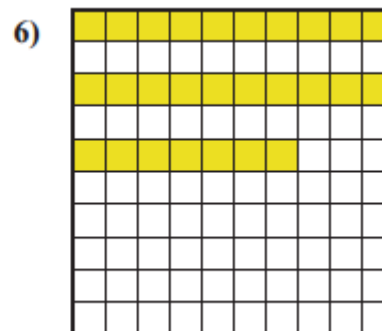
- A. 0,06
 B. 60,00
 C. 0,6
 D. 6,0



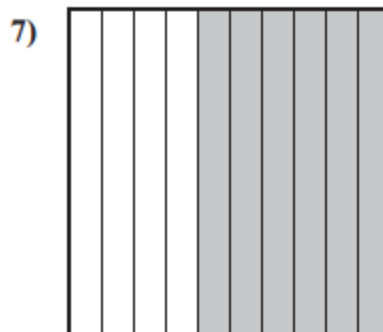
- A. 0,5
 B. 5,0
 C. 0,05
 D. 50,00



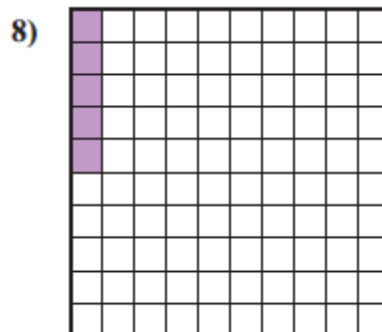
- A. 0,021
 B. 21,00
 C. 0,0021
 D. 0,21



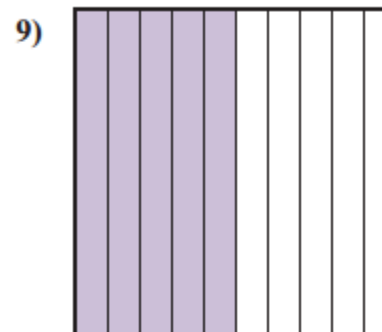
- A. 0,27
 B. 27
 C. 0,0027
 D. 0,027



- A. 0,06
 B. 0,6
 C. 6,0
 D. 60,00



- A. 0,5
 B. 5,0
 C. 0,005
 D. 0,05



- A. 0,05
 B. 0,5
 C. 50,00
 D. 5,0