

nombre _____


curso _____

fecha _____


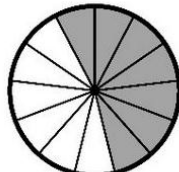
PAUTA: COMPARACIÓN DE FRACCIONES

COMPARACIÓN DE FRACCIONES

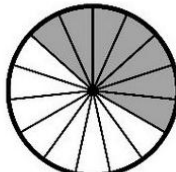

(Fracciones con el mismo numerador)

 $\frac{4}{5}$


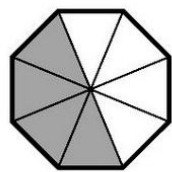
>

 $\frac{4}{14}$  $\frac{7}{13}$

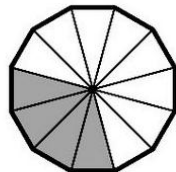
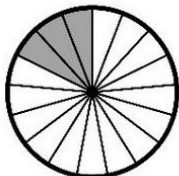
>

 $\frac{7}{15}$  $\frac{2}{11}$

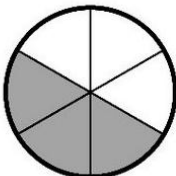
>

 $\frac{2}{20}$  $\frac{4}{8}$


>

 $\frac{4}{12}$  $\frac{3}{17}$

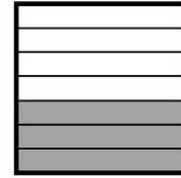
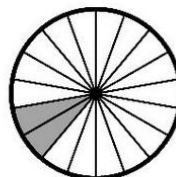
<

 $\frac{3}{6}$

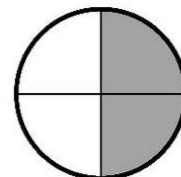

Escribe el símbolo < , > según corresponda

 $\frac{3}{19}$


<

 $\frac{3}{7}$  $\frac{2}{18}$

<

 $\frac{2}{4}$  $\frac{1}{10}$

<

 $\frac{1}{9}$ 

www.actiludis.com